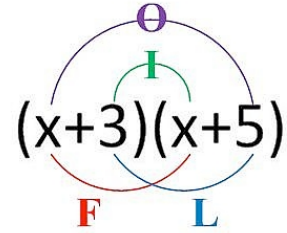


Name \_\_\_\_\_

Section \_\_\_\_\_

## Multiplying Binomials FOIL Practice Worksheet



Find Each Product.

1.  $(x + 1)(x + 1)$

2.  $(x + 1)(x + 2)$

3.  $(x + 2)(x + 3)$

4.  $(x + 3)(x + 2)$

5.  $(x + 4)(x + 3)$

6.  $(x - 6)(x + 2)$

7.  $(x - 5)(x - 4)$

8.  $(y + 6)(y + 5)$

9.  $(2x + 1)(x + 2)$

10.  $(y + 6)(3y + 2)$

11.  $(2x + 1)(2x + 1)$

**Multiplying Binomials Cont...**

12.  $(x + 5)(3x - 1)$

13.  $(2x - 1)(x - 3)$

14.  $(x + y)(x + y)$

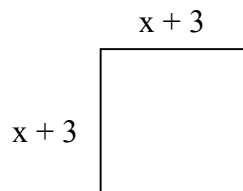
15.  $(3x + y)(x + y)$

16.  $(2x + y)(2x - y)$

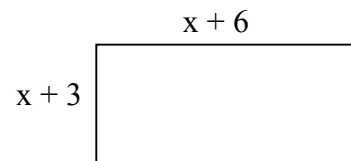
17.  $(3x - y)(x + 2y)$

**Find the area of each shape.**

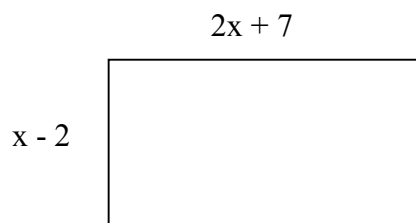
18.



19.



20.



21.

